

Year 2


All of our work for the next two weeks is based around the book 'Starry Eyed Stan!' Please find today's learning tasks below.

The table below explains the tasks and you will find the resources underneath. Your child will know which challenge they usually access in each subject and which task will be appropriate for them.

Year group: 2		Date: 02.07.20	
English	Starry Eyed Stan ! Please read the story again or retell it to your family. There is a Powerpoint of the story or you can listen or read to the e –book.		
	Bronze	Silver	Gold
	Choose a thought and speech bubble sheet to complete to show what the character is thinking and saying.	Choose at least 2 thought and speech bubble sheets to complete to show what the character is thinking and saying.	Choose 3 or more thought and speech bubble sheets to complete to show what the character is thinking and saying.
Maths	Warm Up – follow this link to complete your maths warm up. https://www.ictgames.com/rangeArranger/index.html This is a game linked to ordering numbers.		
	Bronze	Silver	Gold
	Today there are a variety of addition and subtraction challenge cards to complete. Try the ones with one star in the top corner.	Today there are a variety of addition and subtraction challenge cards to complete. Try the ones with two stars in the top corner.	Today there are a variety of addition and subtraction challenge cards to complete. Try the ones with three stars in the top corner.
Reading	Choose an activity from the reading Bingo sheet.		
Phonics	Follow the link to https://www.bbc.co.uk/bitesize/topics/zghpk2p learn about homophones and play the games.		

Unless otherwise specified, please complete the tasks in either your home learning book or print out the document below.

Starry-Eyed Stan



Starry-Eyed Stan



Starry-Eyed Stan



Starry-Eyed Stan




Starry-Eyed Stan



Starry-Eyed Stan



Starry-Eyed Stan



Starry-Eyed Stan



Starry-Eyed Stan

Addition and Subtraction Challenge Cards



Starry-Eyed Stan Addition and Subtraction

- 1 2 fish were swimming in the cave.

5 more fish swam in.

How many fish were in the cave now?

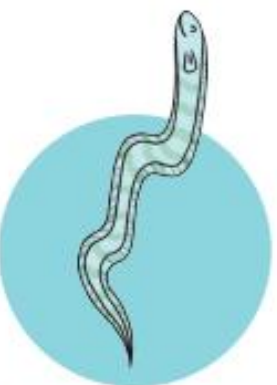


Starry-Eyed Stan Addition and Subtraction

- 2 6 eels were watching Stan sing.

4 more eels joined the audience.

How many eels were there altogether?



Starry-Eyed Stan Addition and Subtraction

- 3 9 starfish were at a sea party.

4 starfish went home.

How many starfish were left at the party?



Starry-Eyed Stan Addition and Subtraction

- 4 Lancelot caught 10 fish.
5 of the fish escaped.

How many fish did Lancelot still have?



Starry-Eyed Stan Addition and Subtraction

- 6 There were 9 yellow fish, 7 blue fish and 4 purple fish in the bay.

How many fish were there in total?



Starry-Eyed Stan Addition and Subtraction

- 5 Stan has spaces in his band for 22 sea creatures.

He already has 6 singers and 6 drummers.

How many more sea creatures can Stan fit in his band?



Starry-Eyed Stan Addition and Subtraction

- 7 There were 24 starfish at Stan's concert.
8 starfish left halfway through.

How many starfish were there left at the concert?





- 8 There were 20 oysters in their shells.
7 shells opened up.

How many oyster shells were still closed?



- 10 It takes 54 seconds for a fish to swim 6 metres.
It takes a jellyfish 20 seconds more to swim
6 metres.

How long does it take a jellyfish to
swim 6 metres?



- 9 Lancelot ate 32 fish for breakfast and then
he ate 12 fish for lunch.

In total, how many fish did Lancelot eat?



- 11 There were 38 seahorses playing in the sea.
10 were red, 4 were purple and the rest
were blue.

How many seahorses were blue?



- 12 An octopus eats 56 prawns on Tuesday. He eats 7 fewer prawns on Wednesday and on Thursday he eats 6 fewer than he did the day before.

How many prawns does the octopus eat on Thursday?



Answers

- | | | | | | |
|---|----|----|----|------------|-----|
| 1 | 7 | * | 9 | 44 | *** |
| 2 | 10 | | 10 | 74 seconds | |
| 3 | 5 | | 11 | 24 | |
| 4 | 5 | ** | 12 | 43 | |
| 5 | 10 | | | | |
| 6 | 20 | | | | |
| 7 | 16 | | | | |
| 8 | 13 | | | | |