


Year 2

Please find today's learning tasks below.

The table below explains the tasks and you will find the resources underneath. Your child will know which challenge they usually access in each subject and which task will be appropriate for them.

Year group: 2		Date: 4.06.20	
English	<p><b>A Postcard from London</b></p> <p>Imagine that you have visited London for the first time (before lockdown!!!) and you are writing a postcard to your family at home.</p> <p>You might want to include</p> <ul style="list-style-type: none"> <li>• Where you have been</li> <li>• What you have seen</li> <li>• What the best thing was</li> </ul>		
	<b>Bronze</b>	<b>Silver</b>	<b>Gold</b>
	<p>Use the sheet below or draw your own and write about all the marvellous things you have seen and done. Don't forget to include as much detail as you can and definitely different sentence starts, 2A sentences and a range of conjunctions.</p>		
Maths	<p>Warm Up – follow this link to complete your maths warm up.</p>		
		<p><a href="https://www.ictgames.com/mobilePage/chimney/index.html">https://www.ictgames.com/mobilePage/chimney/index.html</a></p> <p>Odd and Even Numbers Game on ICT GAMES</p>	

	<b>Bronze</b>	<b>Silver</b>	<b>Gold</b>
	<p>Complete the activity sheets below about coins, which we have learnt about previously.</p> <p>Remember you can draw / jot things down in your book to help you work it out.</p> <p>After, complete your reasoning task.</p>	<p>Complete the activity sheet below about coins, which we have learnt about previously.</p> <p>Remember you can draw / jot things down in your book to help you work it out.</p> <p>After, complete your reasoning task.</p>	
<b>Reading</b>	Complete the reading comprehension task below.		
<b>Phonics</b>	<p>Go to this link (chrome works best) <a href="https://www.ictgames.com/mobilePage/lcwc/index.html">https://www.ictgames.com/mobilePage/lcwc/index.html</a> (if link doesn't work copy into browser).</p> <p>Choose Year 2 – click on patterns and then choose ing, ed, er, est and press go!</p> <p>Read the words carefully and then use the keyboard to retype them.</p>		

Unless otherwise specified, please complete the tasks in either your home learning book or print out the document below.

---

---

---

---

---

---

---

---

---

---

---

---



---

---

---

---

---

# Shooting for the Stars

## Our Planet

Planet Earth is one of eight planets in our solar system. Earth spins (very slowly) around. It takes one day for the Earth to spin around once.

Nearly three-quarters of the Earth is covered in water. In the oceans, seas, rivers and lakes, there are lots of different plants and animals.

The rest of the Earth is covered in land. Many parts of the land are inhabited (lived on) by people, although there are still some areas where nobody lives.



## Our Solar System


The planets in our solar system all travel around the Sun. Earth is the third closest planet to the Sun. The planet nearest to the Sun is Mercury, which is very hot. The planet furthest from the Sun is Neptune, the coldest planet in the solar system.

## The Moon

The Moon travels around the Earth. In 1969, Neil Armstrong and Buzz Aldrin travelled to the Moon on a rocket called Apollo 11. When they landed on the Moon, they planted a flag.

### Did You Know?

Scientists are still trying to work out if there is any water on the surface of the Moon. If there is, then one day plants could grow and people may even be able to visit!



# Questions

1. How many planets are in our solar system? Circle one.

eight

nine

ten

2. What does 'inhabited' mean? Circle one.

swam

lived on

eaten

3. When did the first astronauts land on the Moon? Circle one.

1963

1969

1968

4. Who were the first people to land on the Moon?

---

5. In the text, what does it say may happen if scientists find water on the Moon? Tick one.







Fish could live there.

Plants may be able to grow.

People could build a swimming pool.

### Using Pounds and Pence

2. Total up the coins and use greater than ( $>$ ) and less than ( $<$ ) to compare the amounts.

3. Circle all the boxes that contain more than £1.

Bronze Challenge

Janet buys a pen for 34p and a rubber for 22p. How much does she spend?

Alex gives his friend 35p. He is left with 20p. How much did he have to begin with?

# Maths Silver and Gold

Look at the coins below. How many different ways can you use them to make a total of 25p? One has been done for you.



10p, 10p, 5p	25p	Free One!
		Good Start!
		Keep Going!
		Doing Well!
		You've Found Lots!
		Good!
		Very Good!
		Excellent!
		Superb!
		Amazing!
		Professional!
		World Record!



## Silver and Gold Challenge

Nura has four coins. She has 36p. What coins must she have?

Ian spends 23p on a packet of crisps and 41p on a drink. He gets 36p change. He gives the shopkeeper 2 coins. What were the coins?





