








Year 2

Please find today's learning tasks below.

The table below explains the tasks and you will find the resources underneath. Your child will know which challenge they usually access in each subject and which task will be appropriate for them.

| Year group: 2 | | Date: 11.06.2020 | | |
|----------------------|---|---|--|--|
| English | The Bear who came to babysit is the story that we will focus on in our English work this week. <div style="text-align: right; margin-top: 10px;">  </div> | | | |
| | Bronze | Silver | Gold | |
| | Today watch a powerpoint about newspaper reports – then you are going to try to write a front page of a report yourself. Our Gorilla report is at the bottom to show you what a good one looks like. Then you can use the outline below if you like or write it into your book. | Today watch a powerpoint about newspaper reports – then you are going to try to write a report yourself. Our Gorilla report is at the bottom to show you what a good one looks like. Then you can use the outline below if you like or write it into your book. | | |
| Maths | Warm Up – Can you discuss this reasoning problem with a grown up? <div style="border: 1px solid black; padding: 10px; margin: 10px auto; width: 80%; text-align: center;"> <p>2. The farmer only has 100kg of hay to feed his animals. A small hay bale weighs 2kg. How many animals can he feed using his hay?</p> <div style="display: flex; justify-content: space-around; align-items: center;"> <div style="text-align: center;">  <p style="border: 1px solid green; border-radius: 10px; padding: 2px 10px; display: inline-block;">A sheep needs 1 bale.</p> </div> <div style="text-align: center;">  <p style="border: 1px solid green; border-radius: 10px; padding: 2px 10px; display: inline-block;">2kg</p> </div> <div style="text-align: center;">  <p style="border: 1px solid green; border-radius: 10px; padding: 2px 10px; display: inline-block;">A donkey needs 4 bales.</p> </div> </div> <div style="display: flex; justify-content: space-around; align-items: center; margin-top: 10px;"> <div style="text-align: center;">  <p style="border: 1px solid green; border-radius: 10px; padding: 2px 10px; display: inline-block;">A cow needs 6 bales.</p> </div> <div style="text-align: center;">  <p style="border: 1px solid green; border-radius: 10px; padding: 2px 10px; display: inline-block;">A goat needs 2 bales.</p> </div> <div style="text-align: center;">  <p style="border: 1px solid green; border-radius: 10px; padding: 2px 10px; display: inline-block;">A horse needs 5 bales.</p> </div> </div> <p style="margin-top: 10px;">Find different combinations.</p> <p style="text-align: right; font-size: small; margin-top: 5px;">DP</p> </div> | | | |
| | Bronze | Silver | Gold | |
| | Today you will be learning about temperature. Look at the powerpoint about temperature on the website and then answer the questions below. | Today you will be learning about temperature. Look at the powerpoint about temperature on the website and then answer the questions below. | Today you will be learning about temperature. Look at the powerpoint about temperature on the website and then answer the questions below. | |

| | |
|----------------|--|
| Reading | Go to https://www.educationquizzes.com/ks1/english/comprehension-aliens-stole-my-homework-summer-of-year-2/ Read the piece and answer the questions |
| Phonics | Play this game and add the correct punctuation https://www.turtlediary.com/game/identify-correct-punctuation.html |

Unless otherwise specified, please complete the tasks in either your home learning book or print out the document below.



THE GORILLA GARDENER WITH GREEN FINGERS

Write about the events in order.

People in Twinkleton have been surprised by a new gardener in town. The new gardener is a huge gorilla!

The gorilla escaped from a local zoo in January. Since then, he has been living in the local area and growing his own food. This is when he realised he had a talent for gardening!

On Tuesday, the gorilla put up a poster to let people know about his gardening business.

On Friday, Ali Smith asked the gorilla to weed his yard and plant some carrots. Mr Smith said that the gorilla did a fantastic job.


Yesterday, Kareem was playing in his garden when he spotted the gorilla gardener. "I was scared at first," he said, "but the gorilla was very kind and professional."

time words

headline

The gorilla's customers say he is very good at growing plants. He can work with flowers, trees and vegetables. He plans to open his own garden centre next year.

picture



The Gorilla Gardener has started a business in Twinkleton.

caption



TWINKL TIMES

BEAR BABYSITTER IS THE BEST IN THE BUSINESS





TWINKL TIMES

BEAR BABYSITTER IS THE BEST IN THE BUSINESS



Blank rectangular box with a red border and one horizontal line.


Blank rectangular box with a blue border and two horizontal lines.

Large rectangular box with an orange border. It contains multiple horizontal lines. On the right side, there is a smaller rectangular box with a black border. Below this smaller box, there are two additional horizontal lines.

E

Temperature

1a. Complete the sentence.

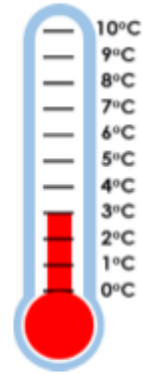


The temperature is _____ .

VF

Temperature

1b. Complete the sentence.




The temperature is _____ .


VF

2a. Which is the highest temperature?

A.




B.




VF

2b. Which is the highest temperature?

A.

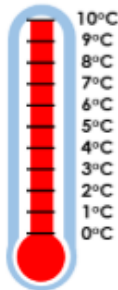


B.




VF

3a. True or false? The temperature is 100°C.



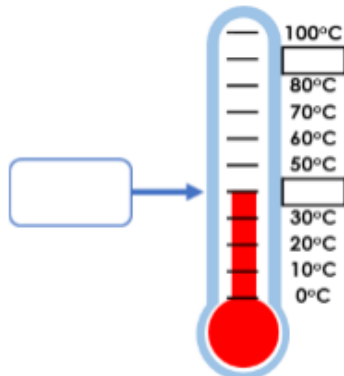
VF

3b. True or false? The temperature is 30°C.



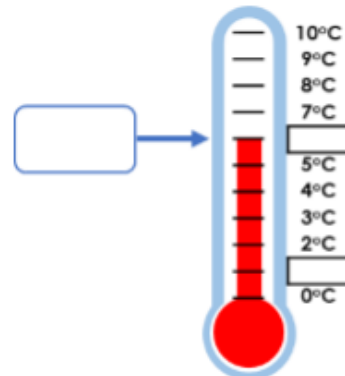
VF

4a. Write the missing numbers on the scale and complete the temperature.



VF

4b. Write the missing numbers on the scale and complete the temperature.




VF

Temperature


Temperature

5a. Complete the sentence.



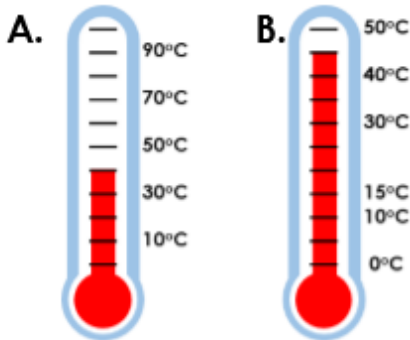
The temperature is _____ . VF

5b. Complete the sentence.



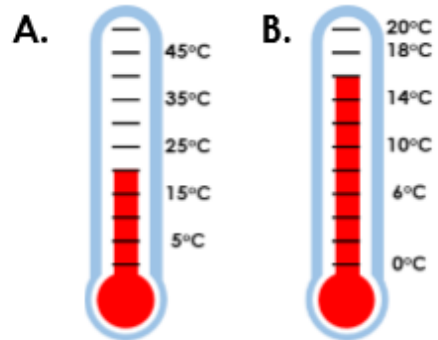
The temperature is _____ . VF

6a. Which is the highest temperature?




VF

6b. Which is the highest temperature?



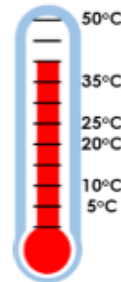
VF

7a. True or false? The temperature is 40°C.



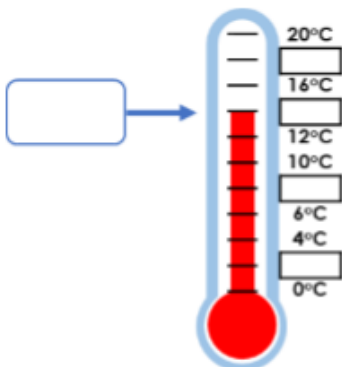
VF

7b. True or false? The temperature is 45°C.



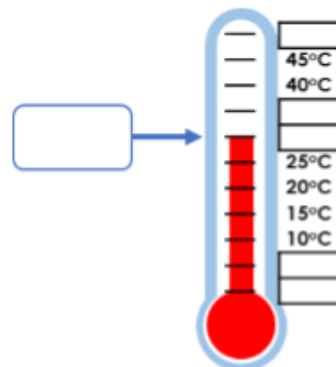
VF

8a. Write the missing numbers on the scale and complete the temperature.



VF

8b. Write the missing numbers on the scale and complete the temperature.




VF

Temperature


Temperature

9a. Complete the sentence.



The temperature is _____ . VF


9b. Complete the sentence.




The temperature is _____ . VF

10a. Which is the highest temperature?

A.



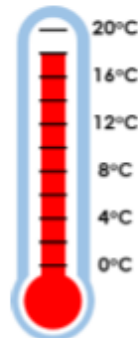
B.




VF

10b. Which is the lowest temperature?

A.

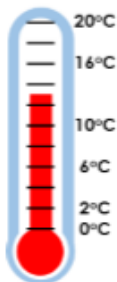


B.



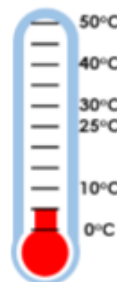
VF

11a. True or false? The temperature is 14°C.



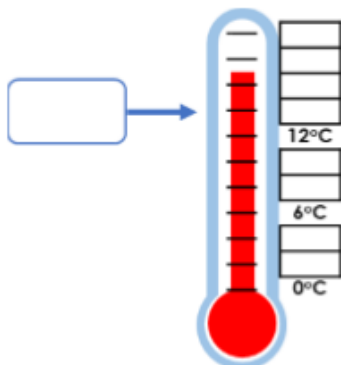
VF

11b. True or false? The temperature is 5°C.



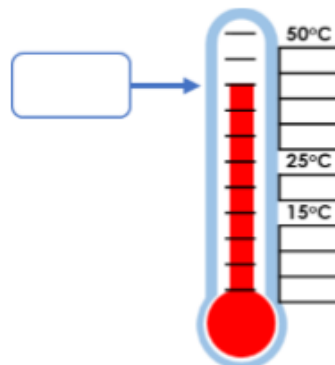
VF

12a. Write the missing numbers on the scale and complete the temperature.



VF

12b. Write the missing numbers on the scale and complete the temperature.



VF

