


Please find today's learning tasks below.

The table below explains the tasks and you will find the resources underneath. Your child will know which challenge they usually access in each subject and which task will be appropriate for them.

Year group: 2		Date: 19.05.20	
English	<p>Re-read the PowerPoint on the website to learn about Samuel Pepys and why he is famous.</p> <div style="text-align: center;">  </div> <p>Then follow the link below to watch a short clip about Samuel Pepys.</p> <p style="text-align: center;">https://www.bbc.co.uk/bitesize/topics/z7d7gwx/articles/zhgxcqt</p>		
	Bronze	Silver	Gold
	<p>Can you use the information in the PowerPoint to complete the fact file about Samuel Pepys below?</p>	<p>Using the information you have learnt about Samuel Pepys and the fact file below, can you use the template to write facts about Samuel Pepys? Can you include who he was, why he was famous and any other interesting facts?</p>	
Reading	<p>Follow the link to listen to another of Paddington's adventures in London.</p> <p style="text-align: center;">https://www.youtube.com/watch?v=9fnRlux-QgU</p>		
Spelling	<p>Play the games on Spelling Shed linked to this week's spelling patterns.</p>		

Maths	Log in to TT Rockstars to boost your score and your class score!		
	Bronze	Silver	Gold
	Can you fill in the missing numbers on the 100 square? Can you say the number that is one more and one less than the numbers given?	Can you complete the counting activities and times tables facts on the sheet below?	Can you complete the fractions sheet below?
Other	<p>Today's activity will have a history and geography focus.</p> <p>Read the PowerPoint about the Royal family.</p> <p>Can you label the name of each member of the family?</p> <p>Can you complete the questions based upon the Royal family tree?</p> <p>Challenge Activity-Can you think of some questions of your own, based upon the Royal family tree?</p>		

Samuel Pepys

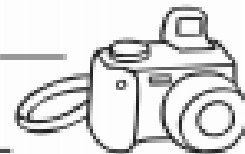


Date of birth: _____




Date of death: _____

_____ is significant because _____



A picture of Samuel Pepys.



Interesting Fact



Samuel Pepys



Date of birth: February 23, 1633




Date of death: May 26, 1703

Samuel Pepys is significant because he wrote a diary and he worked for the British government. Samuel also helped make the Royal Navy better. His diary is full of interesting information, for example, London life, about himself, his family and events like the Great Fire of London.



A picture of Samuel Pepys.




Interesting Fact

Samuel Pepys started writing his diary in 1660 and wrote about his life until 1669.



Silver and Gold English



Bronze Maths

- Read and write numbers to 100 in numerals

Fill in the missing numbers

1			4	5			8		10
		13		15		17			
21			24		26			29	
	32	33		35			38		40
			44	45		47			
51		53			56	57			60
	62	63		65			68	69	
			74		76			79	80
81				85		87	88		
	92	93			96				100

- Say 1 more/1 less to 100

What is 1 more than 29?	What is 1 less than 82?	What is 1 more than 99?	What is one less than 50?
What is 1 more than 67?	What is 1 less than 1?	What is 1 more than 76?	What is one less than 41?
What is 1 more than 19?	What is 1 less than 33?	What is 1 more than 49?	What is one less than 90?

- Count in multiples of 2, 5 & 10

Start at number 2 and count in twos	Start at number 5 and count in fives	Start at number 10 and count in tens
-------------------------------------	--------------------------------------	--------------------------------------

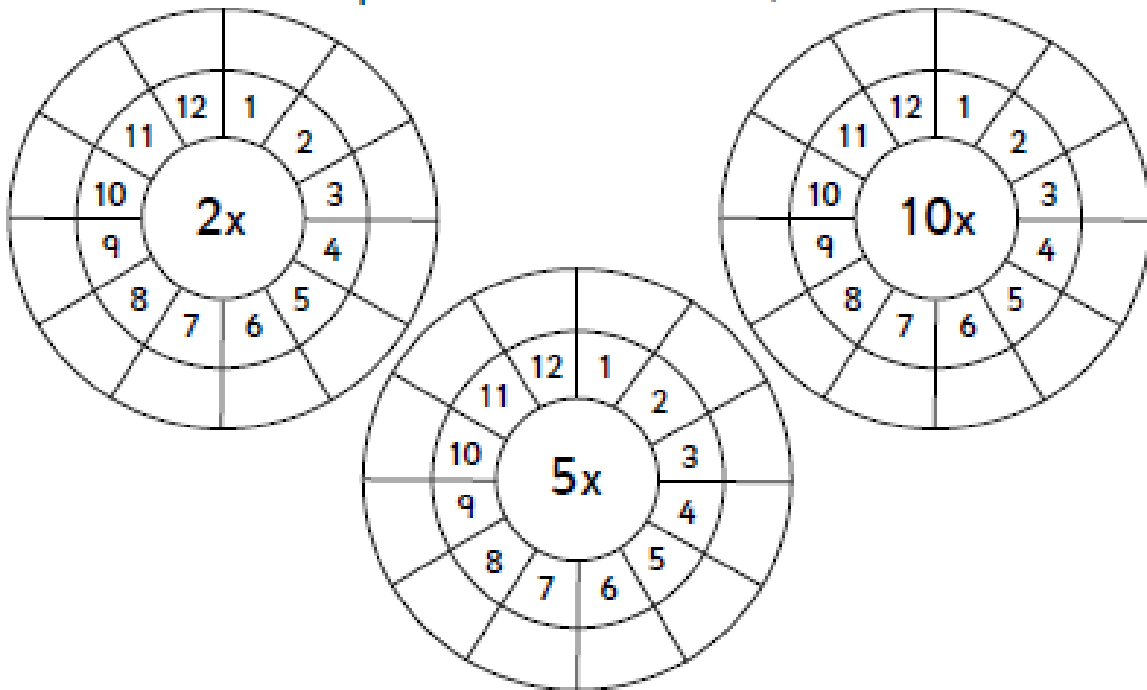
Silver Maths

Year 2

- Count in steps of 2, 3 & 5 from zero and in 10s from any number (forwards and backwards)

Start at zero and count in twos	Start at zero and count in threes	Start at zero and count in fives
Start at 21 and count forwards in tens	Start at 86 and count backwards in tens	Start at 44 and count forwards in tens

- Recall and use multiplication & division facts for 2, 5 & 10 tables



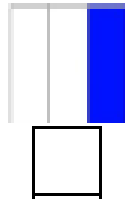

- Recall and use +/- facts to 20

$3 + \square = 20$ $10 - 4 = \square$ $\square + 18 = 20$ $20 - \square = 13$ $3 + \square = 10$ $10 - 7 = \square$	$18 - 8 = \square$ $12 + \square = 20$ $\square + 4 = 14$ $\square - 9 = 10$ $11 + \square = 20$ $10 + 7 = \square$
--	--


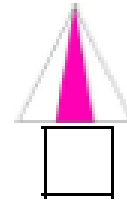
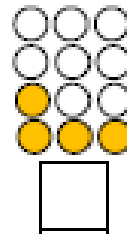
Year 2

- Recognise, find, name and write $\frac{1}{3}$; $\frac{1}{4}$; $\frac{2}{4}$; $\frac{3}{4}$

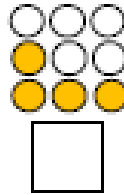
Tick any that are $\frac{1}{3}$



5 = $\frac{1}{3}$ of 6

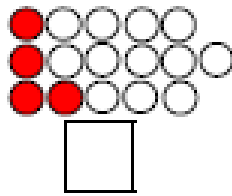


3 = $\frac{1}{3}$ of 9

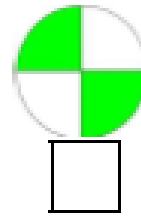



9 = $\frac{1}{3}$ of 18


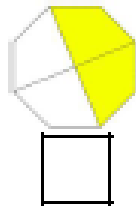
Tick any that are $\frac{1}{4}$



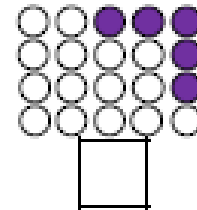
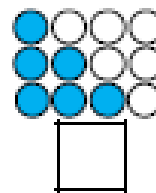
10 = $\frac{1}{4}$ of 20



3 = $\frac{1}{4}$ of 12

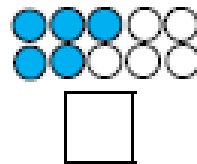



10 = $\frac{1}{4}$ of 40

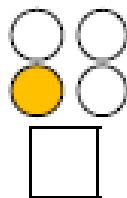
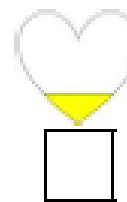


Tick any that are $\frac{2}{4}$


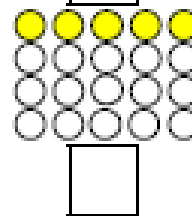

40 = $\frac{2}{4}$ of 80



2 = $\frac{2}{4}$ of 4





50 = $\frac{2}{4}$ of 100



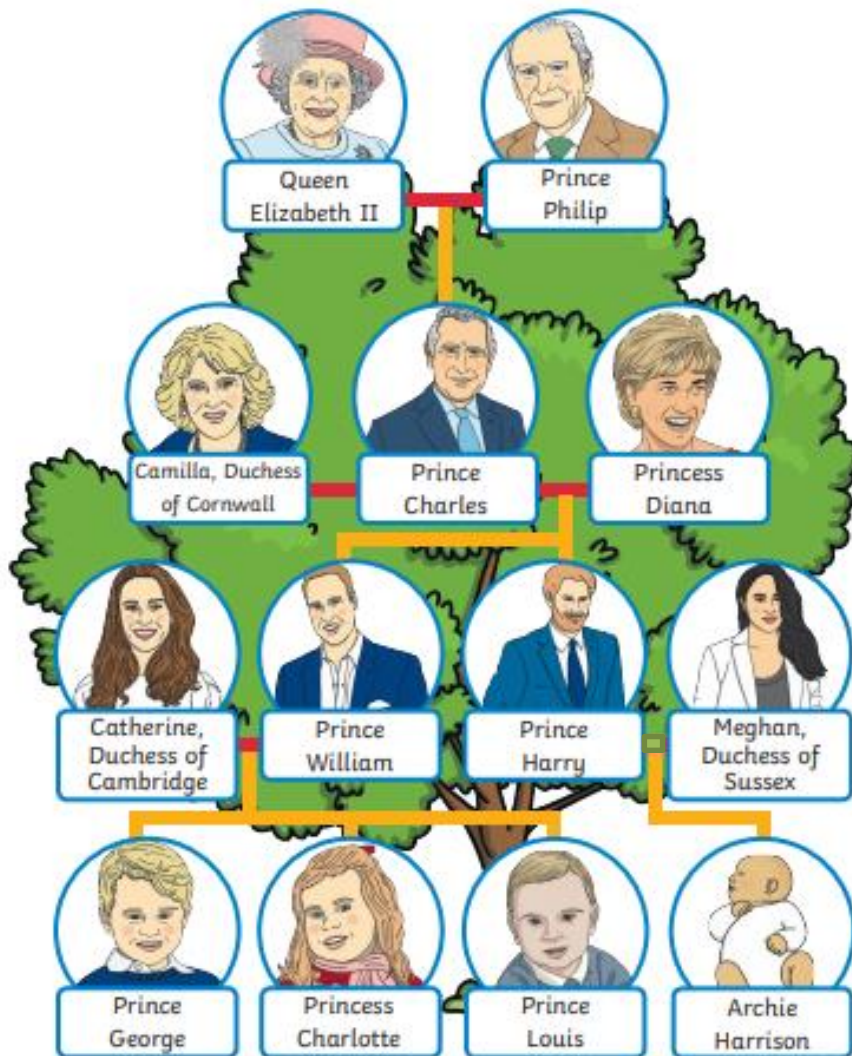
Royal Family Who's Who

Who's who in the Royal Family? Carefully cut out the name cards and stick them next to the correct person. Have you seen any of these people on television? Have you seen a picture of the Queen on coins and stamps?

Queen Elizabeth II	Princess Charlotte	Archie
Prince George	Meghan Markle	Prince Harry
Prince Charles – Prince of Wales	Prince William – Duke of Cambridge	Catherine Middleton – Duchess of Cambridge
Camilla Parker Bowles – Duchess of Cornwall	Prince Louis	Prince Philip



Royal Family Tree



Royal Family Tree

A family tree shows how the members of a family are related. In this Royal Family Tree, red lines show people who are married, yellow lines show those people's children.

Look at the family tree of the Royal Family and complete these challenges.

In 2018, Prince Harry married Meghan Markle. Draw and colour in a red line between Harry and Meghan to show that they are husband and wife.

Follow the yellow lines to find out how many children Prince William has.

What are their names?

Who did Princess Diana marry?
Circle the correct answer.

- Prince Philip
- Prince Charles

Colour Prince Harry's brother in green.

Who is Prince George's mother?
Circle the correct answer.

- Meghan, Duchess of Sussex
- Catherine, Duchess of Cambridge

Colour all of the Queen's relatives blue.