


Please find today's learning tasks below.

The table below explains the tasks and you will find the resources underneath. Your child will know which challenge they usually access in each subject and which task will be appropriate for them.

Year group: 2			Date: 07.05.20
English	<p>Read Humpty Dumpty together and try saying it in different voices! Now read Humpty rhyme 2 and then Humpty rhyme 3. Which one do you like best?</p>		
	Bronze	Silver	Gold
	<p>Today we are going to change part of Humpty Dumpty just like in the rhymes below. Where does he sit this time? Can you make the second line rhyme? Use the sheet to think of new lines and then see if you can read it out aloud to your grown up.</p>		<p>Today we are going to change part of Humpty Dumpty just like in the rhymes below. Use the sheet to think of new lines and then see if you can read it out aloud to your grown up.</p>
Maths	<p>Warm Up – follow this link to complete your maths warm up. http://www.crickweb.co.uk/ks1numeracy.html Complete the reading scales activity.</p>		
			
Reading	<p>Choose one of the David Walliams stories from the catch up link below to enjoy listening to: https://www.worldofdavidwalliams.com/elevenses-catch-up/</p>		
Spelling	<p>Play the games on Spelling Shed to boost not only your own score, but your class score too!</p>		
	Bronze	Silver	Gold

	<p>Access White Rose Maths on the internet and watch the interactive lesson about addition and subtraction. https://whiterosemaths.com/homelearning/year-2/ Home learning-Year 2 –Summer term week 3- Lesson 4-Add and Subtract 1s</p> <p>There is also a video on BBC Bitesize that links to this activity. https://www.bbc.co.uk/bitesize/tags/z7s22sg/year-2-and-p3-lessons/1 Daily lessons-Year 2-Maths.</p> <p>Solve the missing number problems – remember to check your answers (see below).</p>	<p>Access White Rose Maths on the internet and watch the interactive lesson about addition and subtraction. https://whiterosemaths.com/homelearning/year-2/ Home learning-Year 2 –Summer term week 3- Lesson 4-Add and Subtract 1s</p> <p>There is also a video on BBC Bitesize that links to this activity. https://www.bbc.co.uk/bitesize/tags/z7s22sg/year-2-and-p3-lessons/1 Daily lessons-Year 2-Maths.</p> <p>Then complete the activity below that links to what you have just watched.</p>	<p>Access White Rose Maths on the internet and watch the interactive lesson about addition and subtraction. https://whiterosemaths.com/homelearning/year-2/ Home learning-Year 2 –Summer term week 3- Lesson 4-Add and Subtract 1s</p> <p>There is also a video on BBC Bitesize that links to this activity. https://www.bbc.co.uk/bitesize/tags/z7s22sg/year-2-and-p3-lessons/1 Daily lessons-Year 2-Maths.</p> <p>Then complete the activity below that links to what you have just watched.</p>
<p>Other</p>	<p>Today's subject focus will be Design and Technology-Cookery</p> <p>Can you research traditional English food – Can you write a list of 5 traditional English meals? Which are your favourites and why?</p> <p>Tomorrow is VE Day, can you design your own afternoon tea menu? There is a sheet below that you could use.</p> <p>If you have the ingredients available at home, you could cook/make your afternoon tea and share a picture with us. What did you enjoy the most and why? What would you change next time?</p>		

English Starter Task

Humpty Dumpty

Humpty Dumpty sat on a wall,
Humpty Dumpty had a great fall,
All the king's horses and all the
king's men;
Couldn't put Humpty together again.



Humpty Dumpty Rhyme 2

Humpty Dumpty got in his car.

Humpty Dumpty didn't get far.

The engine went vrrrooom and the
horn gave a cough.

Then all of the wheels came tumbling
off

Humpty Dumpty Rhyme 3

Humpty Dumpty sat on the chair

While the barber cut his hair

He cut it long, he cut it short

He cut it with a knife and fork.

English - Bronze

Ideas bank (rhyming words to help)

car – far – star - bar

bus – fuss

mug – rug – jug –plug

mat – hat – rat – fat – bat – flat – plait

dog – frog- log

Humpty Dumpty sat on _____

Humpty Dumpty _____

All the king's horses and all the
king's men

English – Silver and Gold

Ideas bank (rhyming words to help)

car – far – star - bar

bus – fuss

mug – rug – jug –plug

mat – hat – rat – fat – bat – flat – plait

dog – frog- log

Humpty Dumpty _____

Humpty Dumpty _____

All the king's horses and all the
king's men

Humpty Dumpty sat on _____













Humpty Dumpty _____

All the king's horses and all the
king's men

Maths-Bronze

























Number Shape Addition to 10 Missing Numbers

Use the number shapes to work out the missing number in each question.

	+	<input type="text"/>	=	
	+	<input type="text"/>	=	
	+	<input type="text"/>	=	
	+	<input type="text"/>	=	
	+	<input type="text"/>	=	
	+	<input type="text"/>	=	

Number Shape Addition to 20 Missing Numbers

Use the number shapes to work out the missing number in each question.

		+		=		
		+		=		
		+		=		
		+		=		
		+		=		

Add and subtract 1s



- 1 a) Jack has 6 cookies.



Annie gives him one more cookie.
How many cookies does he have now?

Jack has cookies now.

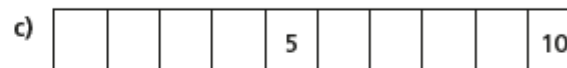
- b) Amir has 4 cookies.



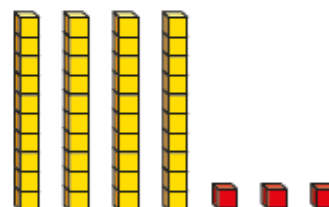
He eats one of his cookies.
How many cookies does he have now?

Amir has cookies now.

- 2 Complete the number tracks.



- 3 a) Filip has made a number using base 10



What number has Filip made?

- b) Rosie also makes a number using base 10
Rosie's number is one more than Filip's number.

What is Rosie's number?



Maths-Silver and Gold

c) Ron's number is 2 more than Filip's number.

What is Ron's number?

d) Dora's number is 1 less than Filip's number.

What is Dora's number?

4 Complete the calculations.

a) $14 + 1 =$ e) $19 - 1 =$

b) $22 + 1 =$ f) $33 +$ $= 34$

c) $54 + 1 =$ g) $18 = 19 -$

d) $= 1 + 61$ h) $= 89 - 1$

5 Complete the calculations.

a) $14 + 2 =$ e) $19 - 2 =$

b) $22 + 3 =$ f) $33 +$ $= 35$

c) $54 + 4 =$ g) $12 = 19 -$

d) $= 5 + 61$ h) $= 89 - 3$

6 Are the number sentences true or false?

a) $17 + 1 = 1 + 17$ _____

b) $17 - 1 = 1 - 17$ _____

Talk about your answers with a partner.



Afternoon Tea Menu

Sandwiches:



Sweet Treats:



Drinks:



My Afternoon Tea Shopping List
