


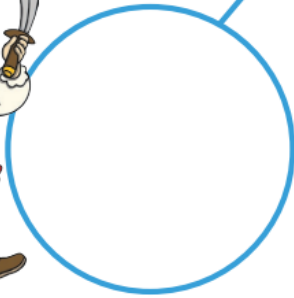


Please find today's learning tasks below.

The table below explains the tasks and you will find the resources underneath.

Year group: Year 1		Date: 04/05/20	
	Bronze	Silver	Gold
English	Complete the reading challenge set for you on Education City. Use your individual login details. https://www.educationcity.com/		
			
Maths	Pirate number bonds to 10. What two numbers can you add together to make 10? Use the part-part-whole model to help you (e.g. part is 1, part is 9, the whole is 10). Can you complete the missing numbers on the pirate treasure to make bonds to 10?	If you can recall your bonds to 10, then try your pirate number bonds to 20. What two numbers can you add together to make 20? Can you complete the missing numbers on the pirate treasure to make bonds to 20? Make your own coins to show the other bonds!	Investigate ways you can make 20 by adding 3 numbers. What numbers will you choose? What do you notice? How many different ways can you find? E.g. $10 + 9 + 1 = 20$ $10 + _ + _ = 20$ $9 + _ + _ = 20$
Phonics/Reading	Watch Geraldine learn the 'igh' grapheme. https://www.youtube.com/watch?v=OYCR2RZ4ZY Can you read the 'igh' words and match them to the correct picture? Don't forget, this week's spellings have been set up on Spelling Shed as games for you to play!	Can you add petals to the flowers? Look at the grapheme in the centre of the flower. Can you add some petals that contain other graphemes that make the same sound? See example sheet. Answers– or, au, aw ai, ay, a, ae, a-e, igh, -y, ie, i-e, i Don't forget, this week's spellings have been set up on Spelling Shed as games for you to play!	Complete the 'Double Bubble Trouble' challenge set for you in the homework section of your Education City. This is saved under the title Gold Phonics 04/05/20. If you do not have this challenge in your homework section and would like to do Gold level, You can search for Double Bubble Trouble. Please make sure it is the Year 1 version as there are several. Don't forget, this week's spellings have been set up on Spelling Shed as games for you to play!
Other	<p>Today's focus is D&T and Drama.</p> <p>Can you dress yourself up like a pirate using props you have made?</p> <p>You could make a pirate hat, eye patch, a telescope, a hook or sword.</p> <p>We can't wait to see your ideas!</p>		
			

BRONZE MATHS



twinkl
visit twinkl.com

$$2 + 8 = \text{[skull and crossbones]}$$

$$4 + \text{[skull and crossbones]} = 10$$


$$7 + 3 = \text{[skull and crossbones]}$$

$$10 = \text{[skull and crossbones]} + 9$$

$$10 = 5 + \text{[skull and crossbones]}$$

Reasoning

Put the coconuts on to the trees.



How many different ways are there to do this?

twinkl

SILVER MATHS

$$16 + 4 = 20$$

$$0 + 18 = 18$$

$$20 = 13 + 7$$

$$20 = 17 + 3$$

$$1 + 19 = 20$$



Reasoning

Put 9 coins in to 3 chests. Each chest must have 1 more coin than the one before.



GOLD MATHS

$$10 + 10 + 10 = 20$$

$$10 + 10 + 10 = 20$$

$$10 + 10 + 10 = 20$$

$$10 + 10 + 10 = 10$$

$$10 + 10 + 10 = 10$$

$$10 + 10 + 10 = 10$$

$$10 + 10 + 10 = 10$$

$$10 + 10 + 10 = 10$$



Reasoning

You can only buy 1 colour of parrot at a time.



1p

2p

3p

4p

5p

8p

Which parrots can you buy for exactly 15p and how many can you buy?

Phonics Bronze

Can you read the 'igh' words and match them to the picture?

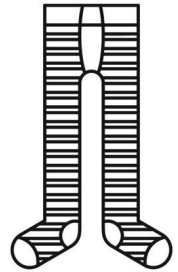
high



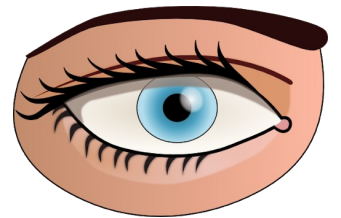
light




night

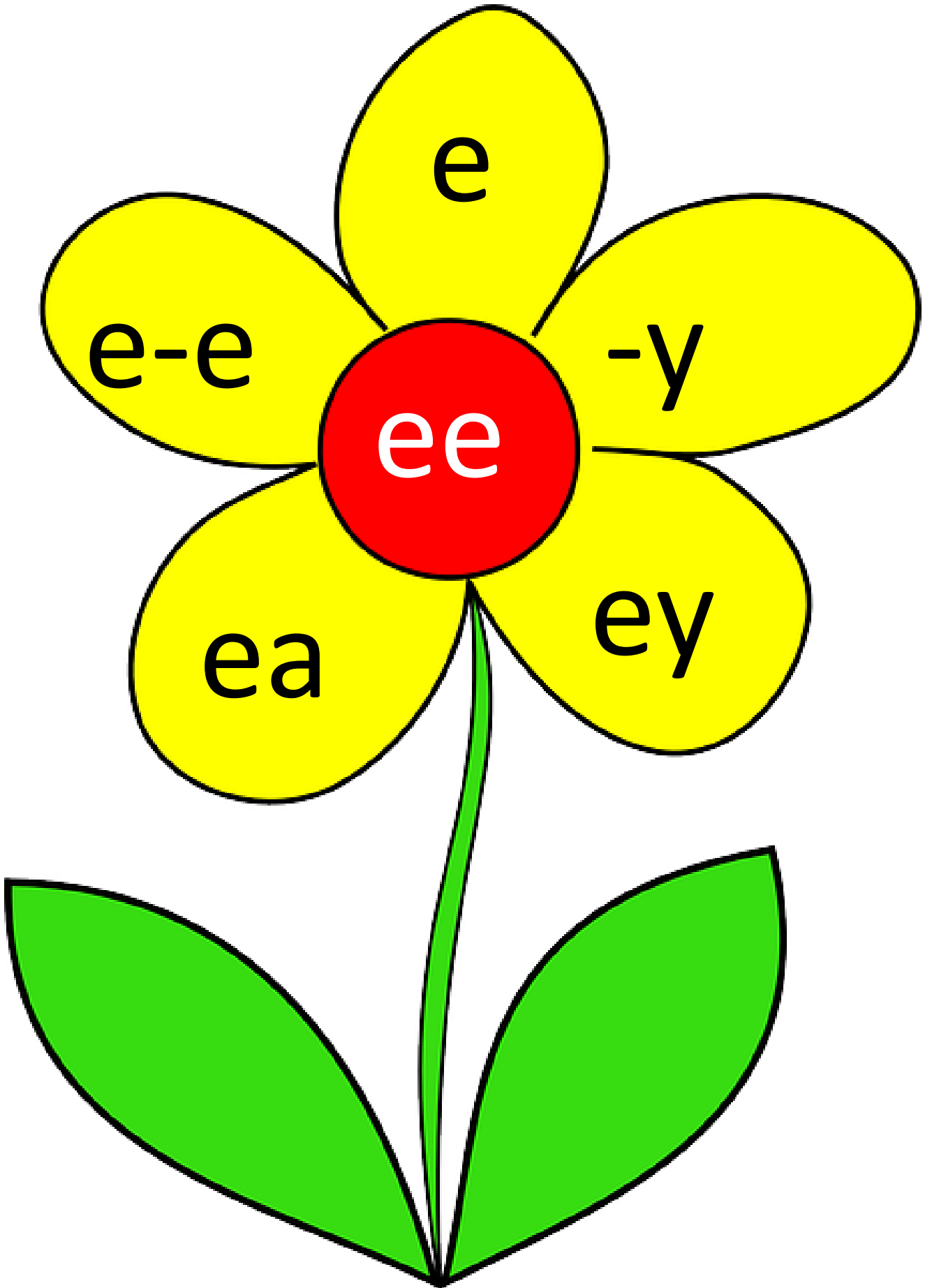


tights



sight





a-e

ie

aw

au

-y

i-e

ay

ae

a

i

or



ai



igh

