






Year 2

Please find today's learning tasks below.

The table below explains the tasks and you will find the resources underneath. Your child will know which challenge they usually access in each subject and which task will be appropriate for them.

Year group: 2 Date: 30.04.20			
English	Bronze	Silver	Gold
	<p>Watch the videos on BBC bitesize about conjunctions. https://www.bbc.co.uk/bitesize/topics/zwwp8mn/articles/z9wvqhv</p> <p>https://www.bbc.co.uk/bitesize/topics/zwwp8mn/articles/zqk37p3</p> <p>Then complete the activity sheet below.</p>	<p>Watch the videos on BBC bitesize about conjunctions. https://www.bbc.co.uk/bitesize/topics/zwwp8mn/articles/z9wvqhv</p> <p>https://www.bbc.co.uk/bitesize/topics/zwwp8mn/articles/zqk37p3</p> <p>Then complete the activity sheet below.</p>	<p>Watch the videos on BBC bitesize about conjunctions. https://www.bbc.co.uk/bitesize/topics/zwwp8mn/articles/z9wvqhv</p> <p>https://www.bbc.co.uk/bitesize/topics/zwwp8mn/articles/zqk37p3</p> <p>Then complete the activity sheet below.</p>

<p>Maths</p>	<p>Warm up Challenge-</p> <div style="display: flex; justify-content: space-around;"> <div data-bbox="414 188 1070 646" style="border: 2px solid blue; padding: 5px;"> <p>Play it!  #MathsEveryoneCanAtHome</p> <p>Maths can involve using your memory. Games are a good way to improve your recall of information.</p>  <div style="border: 1px solid blue; border-radius: 15px; padding: 5px; margin: 5px auto; width: 80%;"> <p>Play the 'tray game' to test your memory or play the 'shopping game' (White Rose Maths style). Use our instructions to learn how to play.</p> </div> <p>Do you have your own favourite memory games? Share the rules with us so we can all play!</p>  </div> <div data-bbox="1115 188 1771 646" style="border: 2px solid blue; padding: 5px;"> <p>Play it!  #MathsEveryoneCanAtHome</p> <div style="display: flex;"> <div style="flex: 1;"> <p><u>The Shopping Game - Maths</u></p> <p>Start by saying 'My favourite thing about Maths ...' and then say a word or object linked to Maths. For example, 'My favourite thing about Maths are prime numbers.' The next person says your idea and then adds their own. For example, 'My favourite thing about Maths are prime numbers and addition.'</p> <p>Keep going until someone forgets.</p> </div> <div style="flex: 1;"> <p><u>The Tray Game</u></p> <p>Collect between 10-20 small items. Place them on a tray. Say what each object is. Look at them for 2-3 minutes. Cover the tray with a tea towel.</p> <p>Can you write down and remember all the items? Do you have any top tips to remember all the objects?</p> </div> </div>  </div> </div>		
	<p>Bronze</p>	<p>Silver</p>	<p>Gold</p>
	<p>Access White Rose Maths on the computer and watch the interactive lesson about problem solving. https://whiterosemaths.com/homelearning/year-2/Home learning-Year 2 –Summer term week 2- Lesson 4. Then complete the activity below.</p>	<p>Access White Rose Maths on the computer and watch the interactive lesson about problem solving. https://whiterosemaths.com/homelearning/year-2/Home learning-Year 2 – Summer term week 2- Lesson 4. Then complete the activity below.</p>	<p>Access White Rose Maths on the computer and watch the interactive lesson about problem solving. https://whiterosemaths.com/homelearning/year-2/Home learning-Year 2 –Summer term week 2- Lesson 4. Then complete the activity below.</p>
<p>Reading</p>	<p>Access Oxford Owl online and read books relevant to your child's book band.</p>		
<p>Phonics</p>	<p>Access Spelling Shed and practise your spellings online.</p>		
<p>Other</p>	<p>Today's subject focus will be Design and Technology. Please finish your London Landmark model that you started yesterday.</p>		

Unless otherwise specified, please complete the tasks in either your home learning book or print out the document below.

Using Different Types of Conjunction

L.O: To recognise and use different types of conjunctions.

Choose a **coordinating conjunction** from the box to complete these sentences.

and but or so

1. I went to bed very late _____ I am tired today.
2. I listened to the weather forecast _____ put an umbrella in my bag.
3. I enjoy playing hockey _____ it's not my favourite sport.
4. We could go to the park _____ to the cinema.

Choose a **subordinating conjunction** from the box to complete these sentences.

although because so that even if whenever

1. My dad has fixed my bike _____ I can take it to the park.
2. My brother is grumpy _____ he has got to do his homework.
3. I will always support my local team, _____ they always lose!
4. He goes abroad on holiday, _____ he doesn't like flying.

Choose a pair of **correlative conjunctions** from the box to complete these sentences.

whether/or either/or both/and not only/but

1. I'm not sure _____ I'm going to the match _____ not.
2. My mum is _____ a brilliant doctor, _____ she is a great runner too.
3. The weather is forecast to be _____ hot _____ humid.
4. We are having _____ pasta _____ curry for dinner.

Using Different Types of Conjunction

L.O: To recognise and use different types of conjunctions.

Choose the correct type of conjunction from the box to complete these sentences.

Coordinating Conjunctions

and but or so

Subordinating Conjunctions

although because so that even if whenever before even though until

Correlative Conjunctions

whether/or either/or both/and not only/but

Questions

1. I went to bed very late _____ I am tired today.
2. My dad has fixed my bike _____ I can take it to the park.
3. We are having _____ pasta _____ curry for dinner
4. I listened to the weather forecast _____ put an umbrella in my bag.
5. I will always support my local team, _____ they always lose!
6. The weather is forecast to be _____ hot _____ humid.
7. My brother is grumpy _____ he has got to do his homework.
8. He goes abroad on holiday, _____ he doesn't like flying.
9. My mum is _____ a brilliant doctor, _____ she is a great runner too.
10. I enjoy playing hockey _____ it's not my favourite sport.
11. We could go to the park _____ to the cinema.
12. I'm not sure _____ I'm going to the match _____ not.

Using Different Types of Conjunction

L.O: To recognise and use different types of conjunctions.

Choose the correct type of conjunction from the box to complete these sentences.

Coordinating Conjunctions

and but or so

Subordinating Conjunctions

although because so that even if whenever before even though until

Correlative Conjunctions

whether/or either/or both/and not only/but

Use a **coordinating conjunction** to rewrite these pairs of sentences as one sentence.

1. We enjoy watching films. We enjoy going bowling.
2. He wants to win the race. He is running more slowly than the others.
3. My mum loves cake. I am going to bake a cake for her birthday.

Use a **subordinating conjunction** to rewrite these pairs of sentences.

4. My hands are freezing cold. I forgot to bring my gloves today.
5. My mum takes me to the match every week. She doesn't like football.
6. I take the dog for a walk every day. Sometimes it is raining.

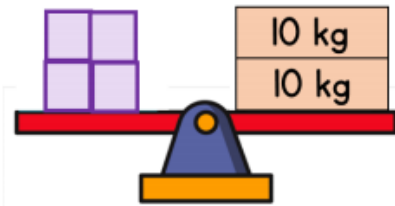
Use a pair of **correlative conjunctions** to rewrite these pairs of sentences.


7. I like carrots. I like asparagus.
8. I don't know if it's going to be sunny. I don't know if it's going to be raining.
9. She is the regional champion. She is also the national champion.

Problem Solving

II Your turn

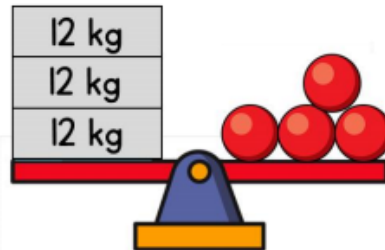
1 The scales are balanced.




Each  block has the same mass.

What is the mass of one of the blocks?

2 The scales are balanced.



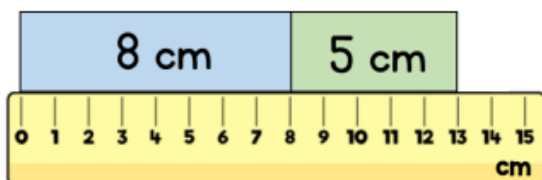
Each  sphere has the same mass.

What is the mass of one of the spheres?

Problem Solving


II Your turn

3 Two strips of paper are placed end to end.



How much longer is the blue strip than the green strip?

4 Here is a toy giraffe and a toy elephant.



How much shorter is the elephant than the giraffe?

Bronze Reasoning Problem

Measuring Length

What is the longest pencil line you can draw on a piece of paper?



Problem Solving



1 Complete the calculations.

$$\text{Yellow Circle} - \text{Green Triangle} = 2$$

$$\text{Yellow Circle} + \text{Yellow Circle} = 10$$

$$\text{Red Square} + \text{Yellow Circle} + \text{Green Triangle} =$$

$$\text{Green Triangle} + \text{Red Square} = 7$$

2 An apple and banana cost the same as a pineapple.

Two pears cost 40p.

Bananas cost the same as pears.

An apple costs 3p less than a pear.

What is the cost of a pineapple?

Problem Solving



3 Ron and Eva are standing in a line of children.

Ron is the 2nd person from the front of the line.

Eva is the 2nd person from the back of the line.

There are 2 people between them.

How many children are in the line?



4 Use the information to put the children in the correct order.

- Ron is in front of Amir.
- Whitney is 3rd from the back.
- Amir is 2nd from the front.
- There are three children between Ron and Dexter.

Silver reasoning problem

Spot the mistake

Measurement-
length
2

- Look at Christopher's answer. Can you spot his mistake?



The length of the string is 14 cm.

Explain how you know.

Gold reasoning problem

Make comparisons

Measurement-
length
2

- Add the correct symbols to compare the lengths.

> = <

33cm 33mm

96mm 96cm

100mm 1m

