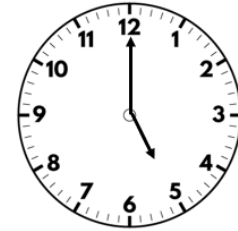


Please find today's learning tasks below.

The table below explains the tasks and you will find the resources underneath. Your child will know which challenge they usually access in each subject and which task will be appropriate for them. Unless otherwise specified, please complete the tasks in either your home learning book or print out the document below.

Year group: 2 Date: 20.04.20			
English	The Holiday Park-Photo Comprehension		
	Bronze	Silver	Gold
	<p>Look carefully at the picture. Discuss with your grown up what you can see. Can you answer the questions (verbally) in full sentences?</p> <p>Can you use the word 'because' to support your ideas?</p>	<p>Look carefully at the picture. Discuss with your grown up what you can see. Can you answer the questions in full sentences? Can you use the word 'because' to support your ideas?</p> <p>Please remember to use your sentence writing and cursive letter strips as a reminder (from your packs).</p>	<p>Look carefully at the picture. Discuss with your grown up what you can see. Can you answer the questions in full sentences? Can you use conjunctions (and, so, but, because) to support your ideas?</p> <p>Please remember to use your sentence writing and cursive letter strips as a reminder (from your packs).</p>

Flashback 4



- 1) Complete the sequence.
5, 10, 15, __ , __
- 2) What is $20 \div 10$?
- 3) Tom has 5 bags of sweets.
There are 2 sweets in each bag.
How many sweets are there altogether?
- 4) Find the sum of 4, 5 and 6



	Bronze	Silver	Gold
	Counting coins in pence Please complete questions 1-7	Complete questions 4-7 from the Counting coins in pence sheet and then questions 1 and 2 on the counting coins and notes page.	Please complete questions 1-6 on the counting coins and pence sheets.
Reading	Please follow the link below to access online reading books. Go to https://www.oxfordowl.co.uk		
Phonics Spelling	Today practice reading the Y2 Common Exception Words in your red home link books. Please access Spelling Shed for this week's new words. Can you make it to the top of our leader board?		
Other	Today's subject focus will be computing . Please look at the SMART rules poster and create your own version to promote staying safe online.		

English

The Holiday Park



The Holiday Park – Follow-Up Work

1. What can you see in the picture?

2. Are all the caravans the same?

3. Where might this photo have been taken?

4. When do you think would be the best time to go here?

5. Who might come and stay here?

6. Do you think it looks noisy or peaceful there?

7. Do you think the holiday park is looked after?

8. What sort of activities do you think you might do here?

9. Do you think you'd like to go here for a holiday?

10. What questions could you ask the people staying here to find out more about the holiday park?

Count money – pence

1 Match the coin to its value.



20p



2p



50p



1p



10p



5p

2 How much money is there?











3 How much money is there?







Maths Bronze and Silver

4 Dexter has this money.



How much money does Dexter have?

5 Write $<$, $>$ or $=$ to compare the money.



6 Annie has this money.



Tommy has this money.



I have more money because I have more coins.



Is Annie correct? _____

How do you know?

7 Rosie wants to buy this packet of sweets.



She has this money.

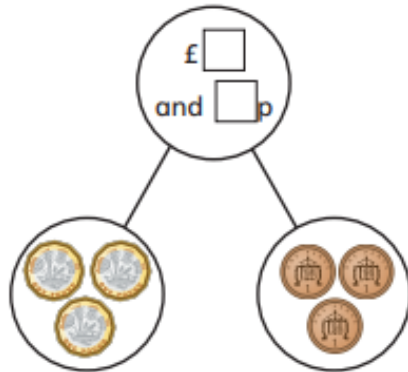


Does Rosie have enough money? _____

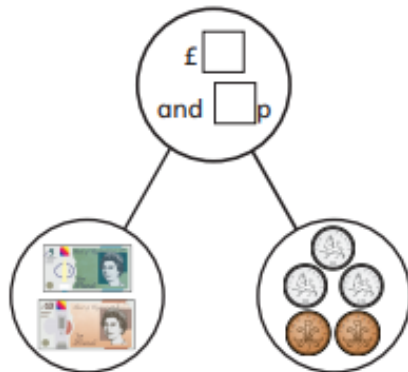
Count money – notes and coins

1 Complete the part-whole models.

a)



b)



2 How much money is there altogether?



There is £ and p.



There is £ and p.



There is £ and p.



There is £ and p.

Maths Gold

3 Complete the additions.

a) $£5 + £1 + 50p + 5p = £$ and p

b) $£10 + £1 + 2p + 1p = £$ and p

c) $£$ and p = $£50 + £20 + 50p + 2p$

d) $£5 + 20p + 2p + £1 = £$ and p

4 Fill in the gaps to make the statements correct.

a) $£$ + $£1 + 50p + 10p = £21$ and p

b) $£10 + £2 + 20p +$ p + $2p = £12$ and $72p$

c) $£5 +$ p = $£5 + 5p + 20p + 50p + 2p$



5 Ron has £18 and 63p in his money box.

He empties the money box onto the table, but some falls on the floor.



How much money falls on the floor?

$£$ and p

What coins or notes could they be?

6 Annie has some coins in her hand.

Amir has some notes in his hand.

Who has more money? Circle your answer.

Annie **Amir** **can't tell**

How do you know?

Computing-The SMART rules

The infographic consists of five horizontal bars, each representing a rule. Each bar has a circular icon with a letter on the left, a title in large bold letters, a descriptive text, and an icon on the right. The background is red with faint 'SMART' text.

- S SAFE** Keep safe by being careful not to give out personal information – such as your full name, email address, phone number, home address, photos or school name – to people you are chatting with online. 
- M MEETING** Meeting someone you have only been in touch with online can be dangerous. Only do so with your parents' or carers' permission and even then only when they can be present. 
- A ACCEPTING** Accepting emails, IM messages, or opening files, pictures or texts from people you don't know or trust can lead to problems – they may contain viruses or nasty messages! 
- R RELIABLE** Information you find on the internet may not be true, or someone online may be lying about who they are. 
- T TELL** Tell your parent, carer or a trusted adult if someone or something makes you feel uncomfortable or worried, or if you or someone you know is being bullied online. You can report online abuse to the police at www.thinkuknow.co.uk  

1001172

