

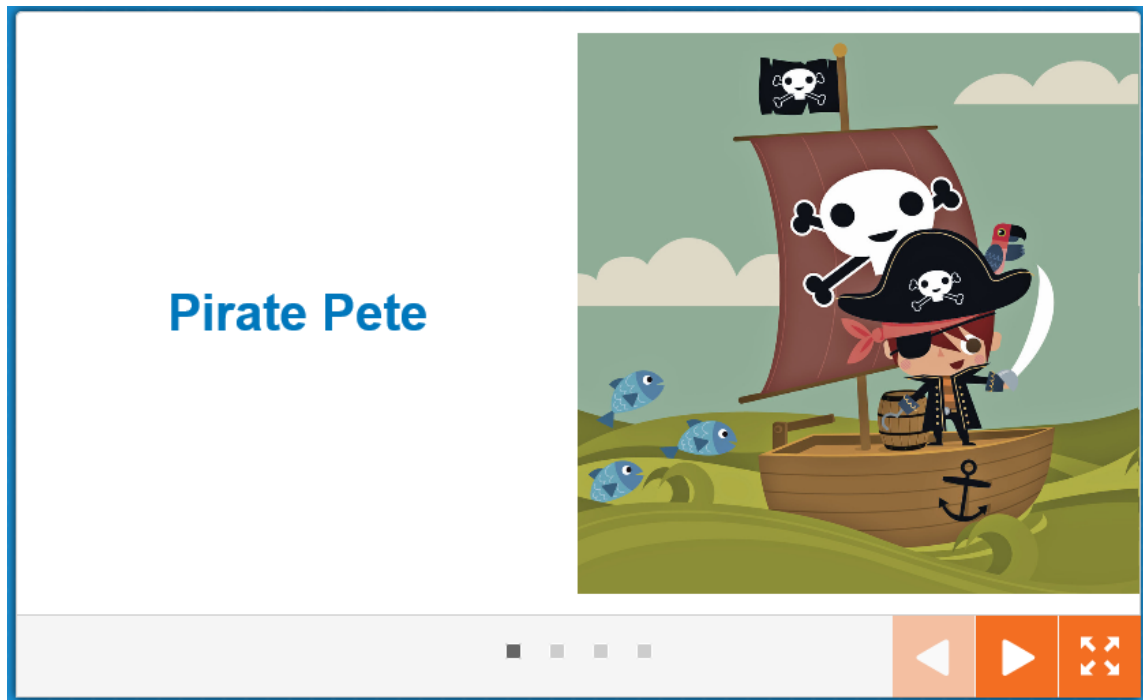


Please find today's learning tasks below.

The table below explains the tasks and you will find the resources underneath.

Year group: Year 1		Date: 30/04/20				
	Bronze	Silver	Gold			
English	Use your Espresso Login to access the poem Pirate Pete. Can you listen to an adult read the poem and spot any words that rhyme?	Use your Espresso Login to access the poem Pirate Pete. Can you read the poem with an adult and make a list of any words that rhyme?	Use your Espresso Login to access the poem Pirate Pete. Can you read the poem with an adult and make a list of any words that rhyme? Can you think of any more words to add to your rhyming lists?			
Maths	This week you have been learning all about halving shapes, objects and amounts. Have a go at the BRONZE fluency and reasoning activities, involving halves.	This week you have been learning all about halves and quarters. Have a go at the SILVER fluency and reasoning activities, involving quarters.	This week you have been learning about halves and quarters. Have a go at the GOLD fluency and reasoning activities, involving quarters.			
Phonics/ Reading	Phonics, have a go at reading the real and nonsense words! Can you find the hidden alien word?	Phonics, have a go at reading the real and nonsense words! Can you find the hidden alien word?	Phonics, have a go at reading the real and nonsense words! Can you find the hidden alien word?			
Other	<p>Our focus today is HISTORY and ART.</p> <p><u>PIRATE NAMES</u></p> <p>Find out about Pirates' names below and then find out what your Pirate name would be!</p> <p>Then we would like you to draw yourself as a pirate!</p> <table border="1" style="width: 100%; border-collapse: collapse;"> <tr> <td style="width: 33%; padding: 5px;"> <p>Bronze— Write your pirate name and draw face! What colour bandana will you have under your hat? Will you have earrings? Will you have a beard?</p> </td> <td style="width: 33%; padding: 5px;"> <p>Silver—Write your pirate name and draw your whole self as a pirate. What clothes will you have? Will you have a hook? Will you have a belt? Will you have a parrot on your shoulder?</p> </td> <td style="width: 33%; padding: 5px;"> <p>Gold—Write your pirate name and draw yourself as a pirate. Think about how you might look and clothes/ accessories you would have. Write a description of what the pirate is like!</p> </td> </tr> </table> <div style="display: flex; justify-content: space-around; margin-top: 20px;">   </div>			<p>Bronze— Write your pirate name and draw face! What colour bandana will you have under your hat? Will you have earrings? Will you have a beard?</p>	<p>Silver—Write your pirate name and draw your whole self as a pirate. What clothes will you have? Will you have a hook? Will you have a belt? Will you have a parrot on your shoulder?</p>	<p>Gold—Write your pirate name and draw yourself as a pirate. Think about how you might look and clothes/ accessories you would have. Write a description of what the pirate is like!</p>
<p>Bronze— Write your pirate name and draw face! What colour bandana will you have under your hat? Will you have earrings? Will you have a beard?</p>	<p>Silver—Write your pirate name and draw your whole self as a pirate. What clothes will you have? Will you have a hook? Will you have a belt? Will you have a parrot on your shoulder?</p>	<p>Gold—Write your pirate name and draw yourself as a pirate. Think about how you might look and clothes/ accessories you would have. Write a description of what the pirate is like!</p>				



Can you log in to Education City and access the poem Pirate Pete? <https://www.discoveryeducation.co.uk/>

The link is below but you can also access it by going to

Key Stage 1-English-Poetry-Books-Pirate Pete

https://central.espresso.co.uk/espresso/primary_uk/subject/module/book/item1130760/grade1/module1122235/index.html

Fluency

Halving a Quantity

1a. Complete the statement based on the picture below.



Half of _____ is _____.



VF

2a. I am thinking of a number.

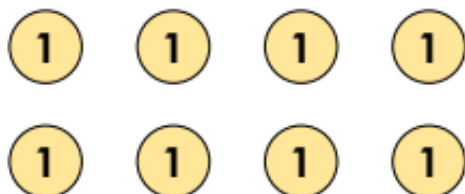
Half of the number is 4.

What number am I thinking of?



VF

3a. Here is half. What is the total?



VF

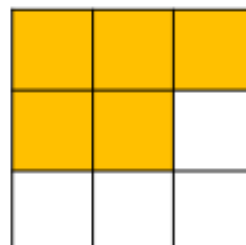
4a. Circle half of the marbles.



Reasoning

Halving a Quantity

1a. Danika thinks she has coloured in half of the squares. Do you agree?




Why or why not?



R

2a. A bag of grapes has been halved incorrectly. How many should each child get?



Explain how you got your answer.



R

3a. Franz ate half of all the raspberries in his fridge.

There were 10 raspberries in his fridge.

How many raspberries did he eat?



PS

Fluency

Quarter of a Quantity

5a. Complete the statement based on the picture below.




There are _____ gems. One quarter of _____ is _____.



VF

6a. Use the counters to complete the statement.



One quarter of 12 is _____.


VF

7a. Here is one quarter. What is the total?



VF

8a. Colour one quarter of the squares.

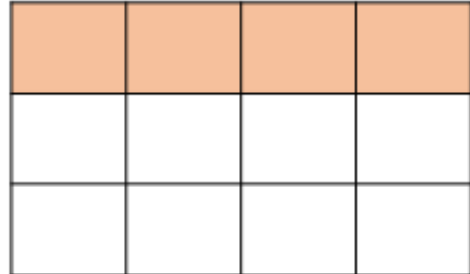


VF

Resoning

Quarter of a Quantity

4a. Tanya thinks she has coloured in one quarter of the squares. Is she correct?



How do you know?



R

5a. Pirate Paul needs to put one quarter of his gems in his treasure chest.



I have put 8 of my gems in my treasure chest.

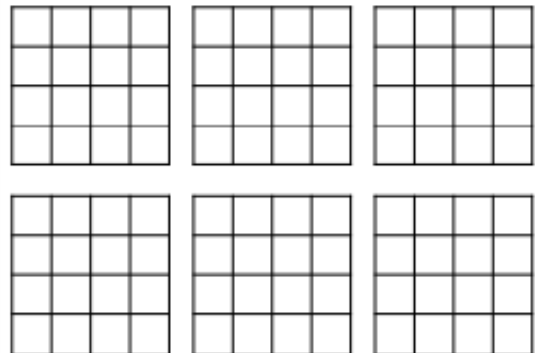


What mistake has Pirate Paul made?



R

6a. Find six different ways to shade a quarter of the shapes.



Fluency

Quarter of a Quantity

9a. Complete the statement based on the picture below.



There are _____ socks. One quarter of _____ is _____.



VF

10a. Complete the statement.



A quarter of 36 is _____.


VF

11a. Here is one quarter of Lucy's money. How much money does Lucy have in total?



VF

12a. Colour a quarter of the pentagons.

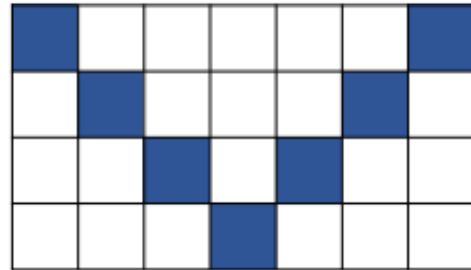


VF

Reasoning

Quarter of a Quantity

7a. Ellie thinks she has coloured in one quarter of the squares. Is she correct?



How do you know?



8a. Pirate Plump needs to put one quarter of his coins in his treasure chest.



I have put 4 of my coins in my treasure chest.

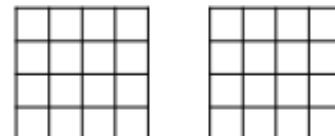



What mistake has Pirate Plump made?



9a. How many different ways can you shade a quarter of the shapes following the rule below?








Rule: Shaded squares cannot be touching.



VF

Can you read all of the alien (nonsense) words and all of the real words?

Challenge-can you find the hidden alien word?

bulm		doom	
short		frem	
tull		drink	
foid		crowds	
strad		splat	
freed		shog	
jof		bead	
holiday		gornig	

There are.....real words.

There are.....alien words.

The hidden alien word is.....

Pirates

Pirates were people who sailed ships around the world looking for other ships to attack. When they attacked ships, they would try to steal whatever the other ship had, especially treasure.

Some pirates had unusual nicknames, such as Blackbeard, Calico Jack and Redbeard.



What Is Your Pirate Name?

Use this **pirate name generator** to make yourself a pirate name.

First Name	
Your Favourite Colour	Your Pirate First Name
Blue	Matey
Red	Captain
Pink	<u>Pegleg</u>
Purple	One-eyed
Green	Scallywag
Orange	Buccaneer
Yellow	Master
Black	Skipper
White	Shipmate

Second Name	
Your Favourite Animal	Your Pirate Second Name
Cat	Blackbeard
Dog	Sparrow
Bird	Hornswoggle
Hamster	Swashbuckler
Horse	Lubber
Something else	<u>McBoatface</u>